

Molecular Structure Ranking Tasks

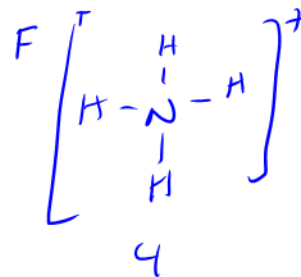
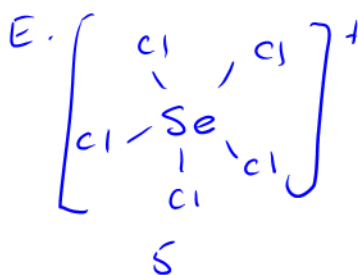
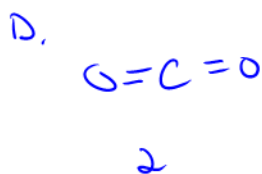
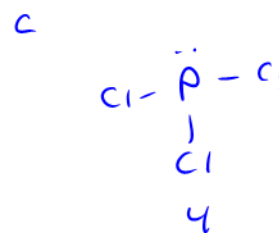
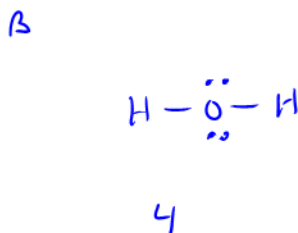
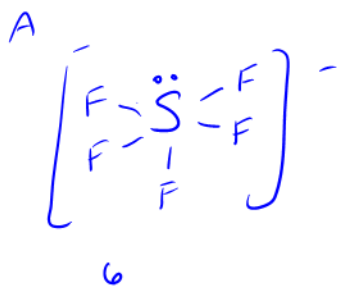
Lewis Structures I

Rank the following chemical formulas from the greatest to least number of electron domains.



Greatest 1 A 2 E 3 B 4 C 5 F 6 D Least

Explain your reasoning below.



e^- domains is # of bonding regions (an -, =, or \equiv) plus any lone pairs.

Circle the response that best describes your confidence in your answer above.

(Basically Guessed) 1 2 3 4 5 (Positive you get it)