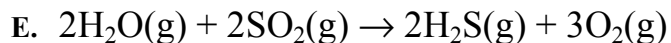
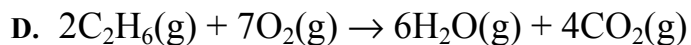
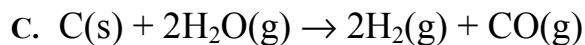
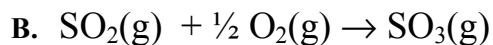
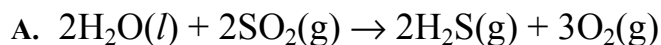


## Daily Problem 20

Name: \_\_\_\_\_

Score: \_\_\_\_\_

For the following chemical reactions, rank them from greatest to least standard enthalpy of reaction. You will need to consult your textbook appendices to complete this problem. If your work expands beyond the page, be sure to staple the extra page(s) to this sheet.



Greatest  $\Delta H_{rxn}^\circ$  \_\_\_\_\_ Least  $\Delta H_{rxn}^\circ$

Circle the response that best describes your confidence in your answer above.

(Basically Guessed) 1      2      3      4      5 (Positive you get it)